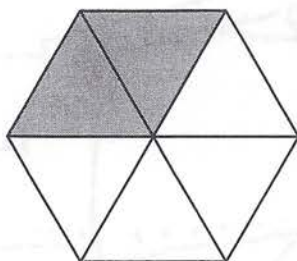
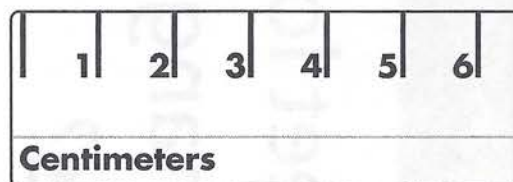


1. What fraction of the shape is shaded?




- (A)  $\frac{2}{3}$   
 (B)  $\frac{2}{4}$   
 (C)  $\frac{2}{6}$   
 (D)  $\frac{4}{6}$

2. Seth found an object that is about 5 centimeters long. Which object could he have found?



- (A) AA battery  
 (B) marker  
 (C) lamp  
 (D) dime

3. Robyn drew two playgrounds.  
 Find the area of each playground.  
 Circle the playground with the greater area.

**A****B**

A: about \_\_\_\_\_ square units    B: about \_\_\_\_\_ square units

4. Write a number sentence and solve.  
 Hector is 27 years older than his son, Manuel.  
 If Hector is 42 years old, how old is Manuel?

\_\_\_\_\_ - \_\_\_\_\_ = \_\_\_\_\_ years old